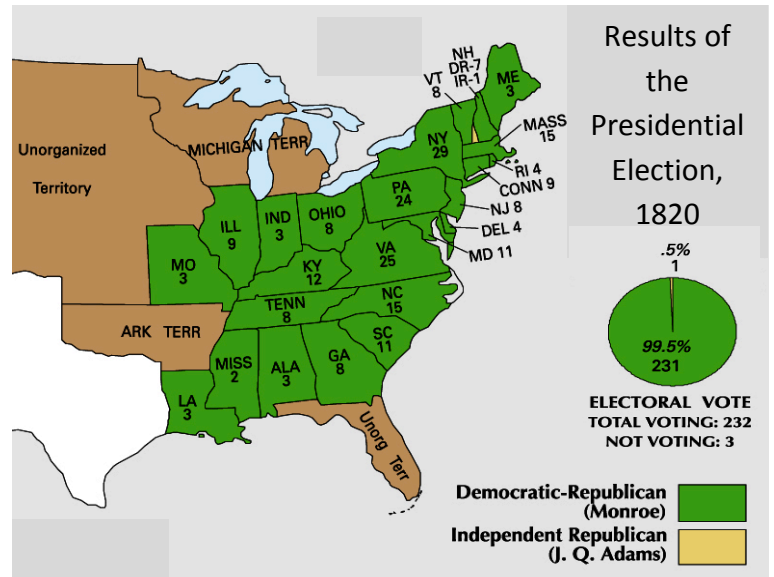


Unit 3 – Jacksonian Democracy, 1824-1844

1820-1828 Election Results

Look at the map to the right, and consider the following:

1. Why did James Monroe win the election by such an overwhelming result?

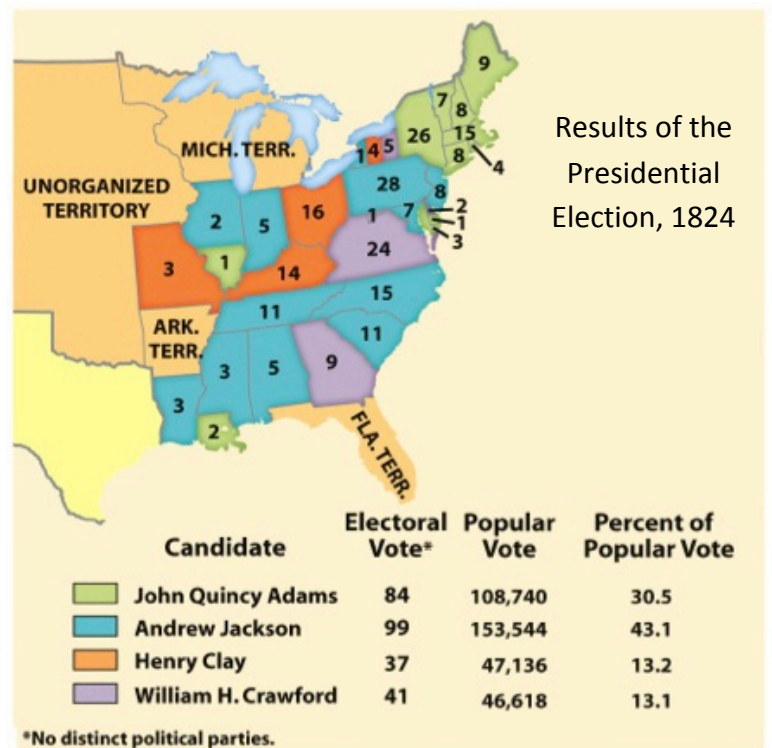


Look at the map to the right, and consider the following:

2. What regions of the country did Andrew Jackson find support in?

3. What regions of the country did John Quincy Adams control in this election?

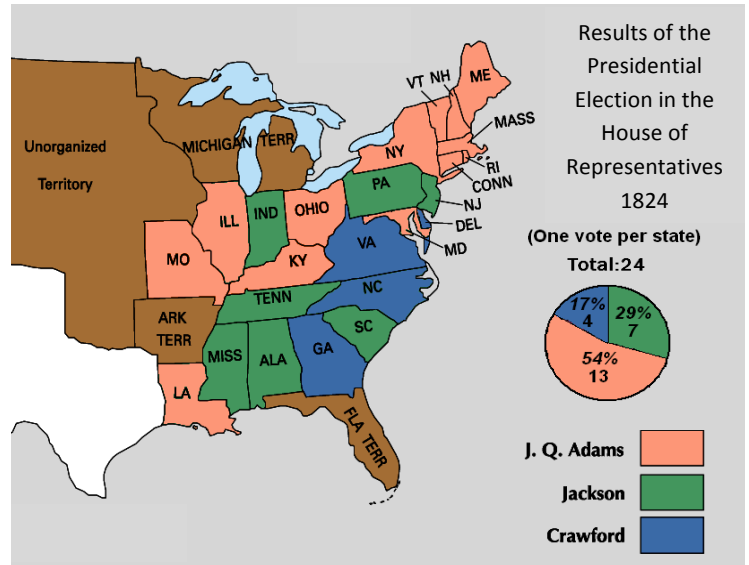
4. How do you think the no-party system affected this election?



Look at the map on the right, and consider the questions that follow:

5. How do you explain how John Quincy Adams received a majority of the votes in the House, even though he received far less support in the electoral college than Andrew Jackson?

6. How did the removal of Henry Clay from the ballot affect the race in the House of Representatives (hint: compare this map to the previous map)?



Look at the map on the right, and consider the questions that follow:

7. What differences were there in the 1828 election from that of the 1824 election, where the two most popular candidates were the same?

8. What do you think was the impact of having solidified political parties in this election, compared to the no-party system of 1824?

